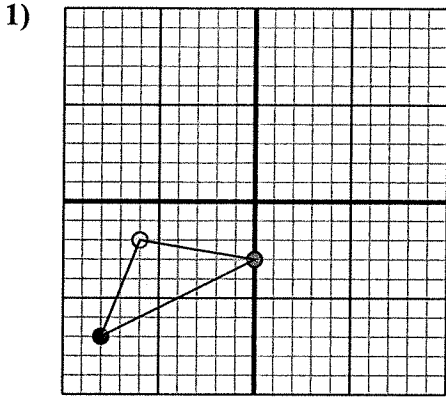


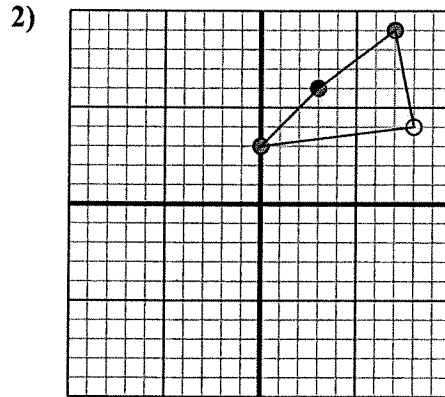
Reflect each shape as described.



The shape above has the following coordinates:

- A. (0,-3)
- B. (-6,-2)
- C. (-8,-7)

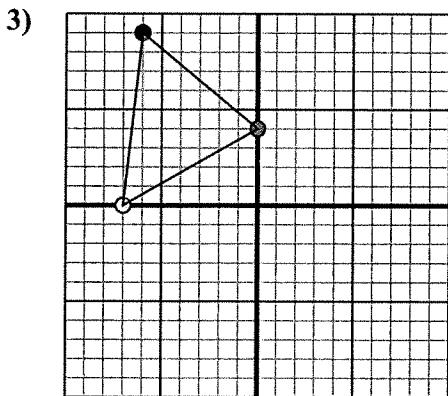
Reflect the shape over the X axis.



The shape above has the following coordinates:

- A. (0,3)
- B. (8,4)
- C. (7,9)
- D. (3,6)

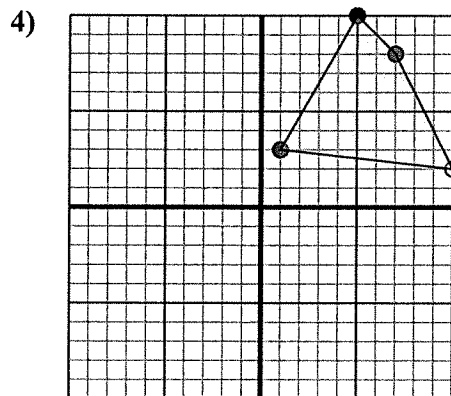
Reflect the shape over the Y axis.



The shape above has the following coordinates:

- A. (0,4)
- B. (-7,0)
- C. (-6,9)

Reflect the shape over the Y axis.



The shape above has the following coordinates:

- A. (1,3)
- B. (10,2)
- C. (7,8)
- D. (5,10)

Reflect the shape over the Y axis.

Answers

1a. _____

1b. _____

1c. _____

1. Graph

2a. _____

2b. _____

2c. _____

2d. _____

2. Graph

3a. _____

3b. _____

3c. _____

3. Graph

4a. _____

4b. _____

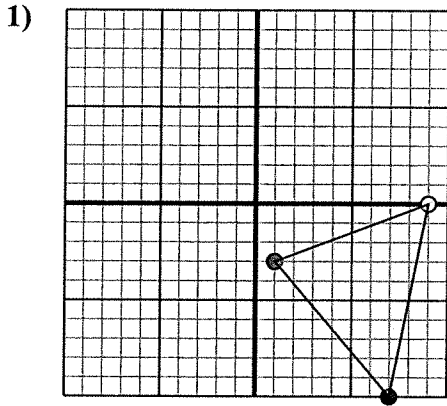
4c. _____

4d. _____

4. Graph



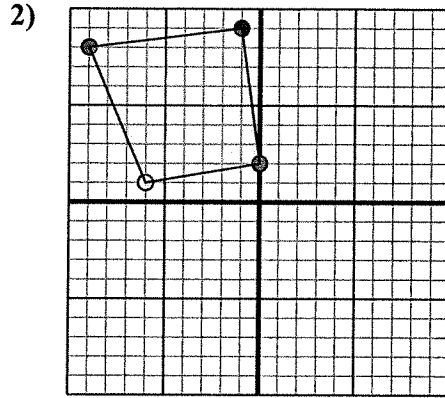
Reflect each shape as described.



The shape above has the following coordinates:

- A. (1,-3)
- B. (9,0)
- C. (7,-10)

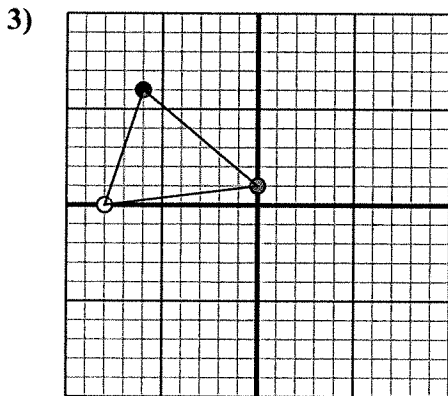
Reflect the shape over the X axis.



The shape above has the following coordinates:

- A. (0,2)
- B. (-6,1)
- C. (-9,8)
- D. (-1,9)

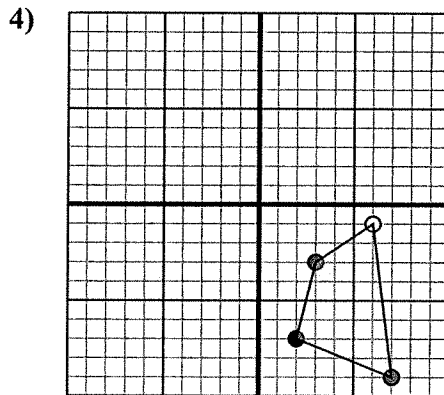
Reflect the shape over the X axis.



The shape above has the following coordinates:

- A. (0,1)
- B. (-8,0)
- C. (-6,6)

Reflect the shape over the X axis.



The shape above has the following coordinates:

- A. (3,-3)
- B. (6,-1)
- C. (7,-9)
- D. (2,-7)

Reflect the shape over the Y axis.

Answers

1a. _____

1b. _____

1c. _____

1. Graph

2a. _____

2b. _____

2c. _____

2d. _____

2. Graph

3a. _____

3b. _____

3c. _____

3. Graph

4a. _____

4b. _____

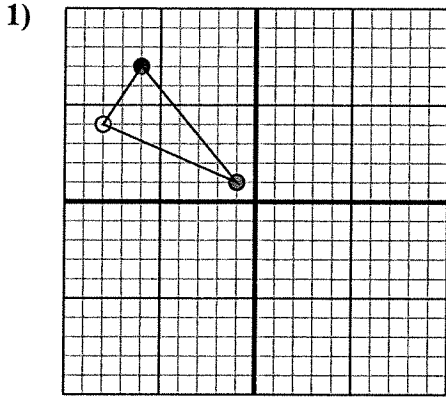
4c. _____

4d. _____

4. Graph



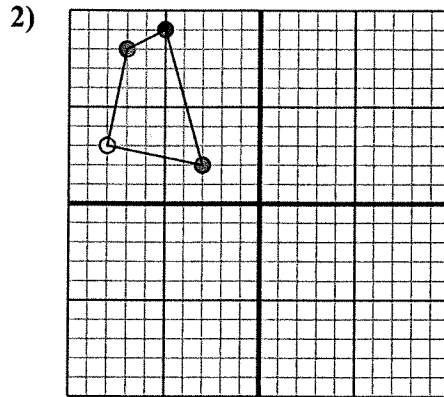
Reflect each shape as described.



The shape above has the following coordinates:

- A. (-1,1)
- B. (-8,4)
- C. (-6,7)

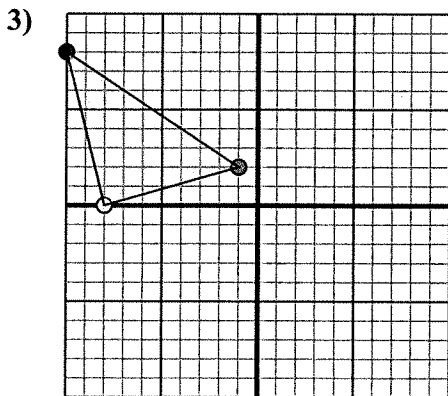
Reflect the shape over the X axis.



The shape above has the following coordinates:

- A. (-3,2)
- B. (-8,3)
- C. (-7,8)
- D. (-5,9)

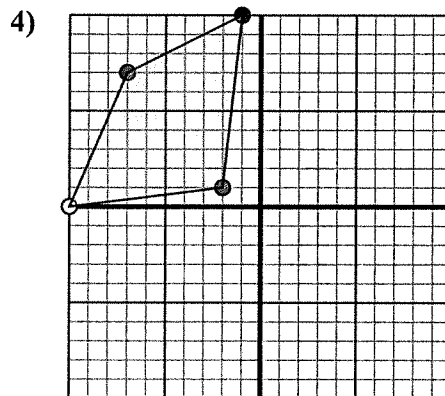
Reflect the shape over the Y axis.



The shape above has the following coordinates:

- A. (-1,2)
- B. (-8,0)
- C. (-10,8)

Reflect the shape over the Y axis.



The shape above has the following coordinates:

- A. (-2,1)
- B. (-10,0)
- C. (-7,7)
- D. (-1,10)

Reflect the shape over the Y axis.

Answers

1a. _____

1b. _____

1c. _____

1. Graph

2a. _____

2b. _____

2c. _____

2d. _____

2. Graph

3a. _____

3b. _____

3c. _____

3. Graph

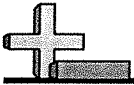
4a. _____

4b. _____

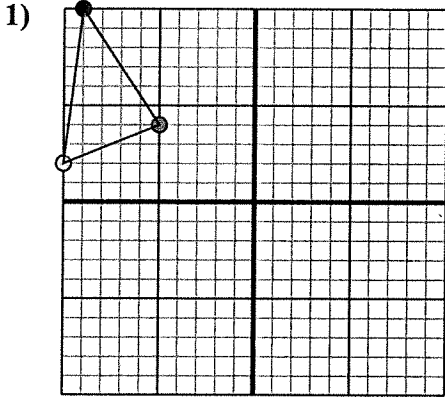
4c. _____

4d. _____

4. Graph



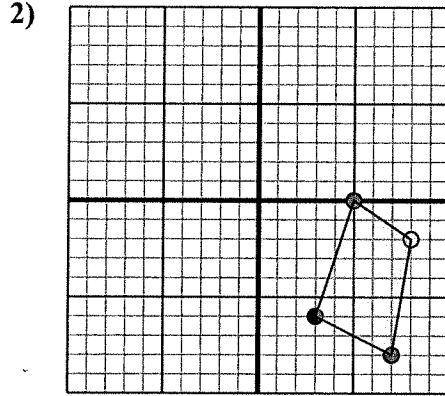
Reflect each shape as described.



The shape above has the following coordinates:

- A. (-5,4)
- B. (-10,2)
- C. (-9,10)

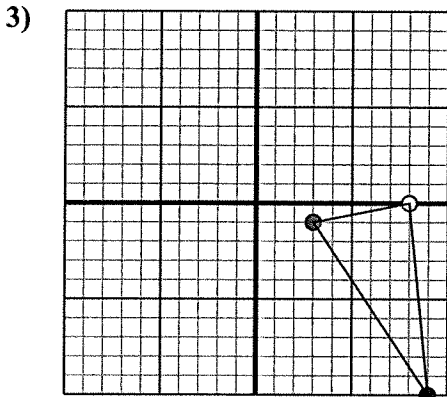
Reflect the shape over the X axis.



The shape above has the following coordinates:

- A. (5,0)
- B. (8,-2)
- C. (7,-8)
- D. (3,-6)

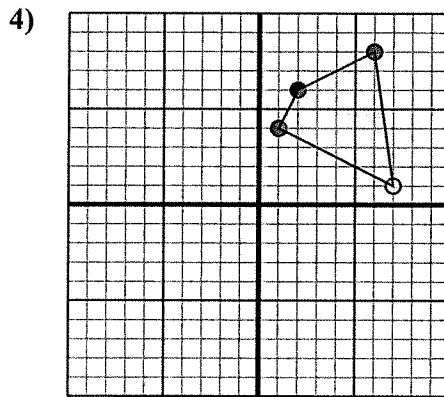
Reflect the shape over the Y axis.



The shape above has the following coordinates:

- A. (3,-1)
- B. (8,0)
- C. (9,-10)

Reflect the shape over the X axis.



The shape above has the following coordinates:

- A. (1,4)
- B. (7,1)
- C. (6,8)
- D. (2,6)

Reflect the shape over the X axis.

Answers

1a. _____

1b. _____

1c. _____

1. Graph

2a. _____

2b. _____

2c. _____

2d. _____

2. Graph

3a. _____

3b. _____

3c. _____

3. Graph

4a. _____

4b. _____

4c. _____

4d. _____

4. Graph