

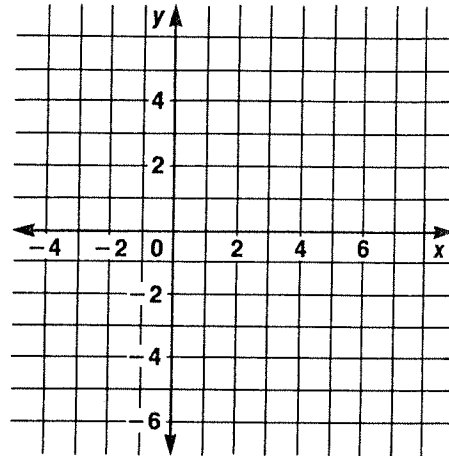
# Practice Worksheet 8-6

## Graphing Equations

Complete each table. Then graph each solution.

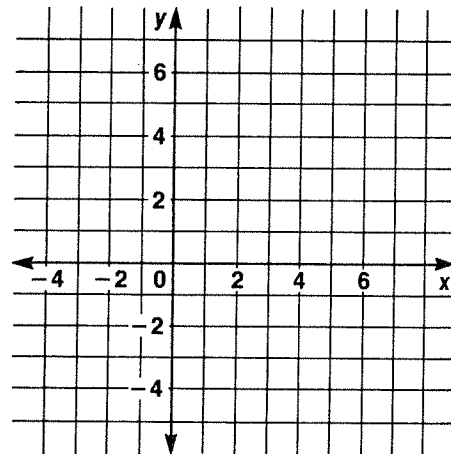
1.

x	$-3x + 4$	y
0		
1		
2		
3		



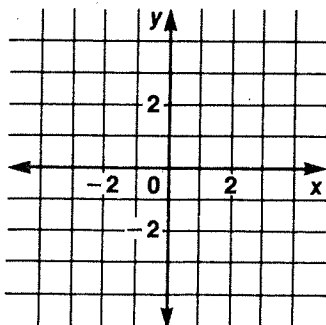
2.

x	$\frac{2}{3}x + 1$	y
-3		
0		
3		
6		

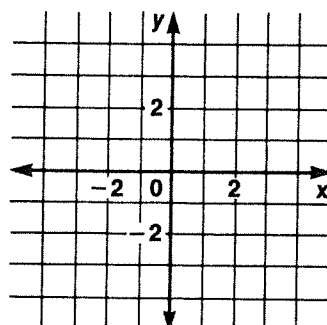


Graph each equation.

3.  $y = \frac{1}{4}x$



4.  $y = -2x + 4$



5.  $y = \frac{1}{2}x - 1$

